

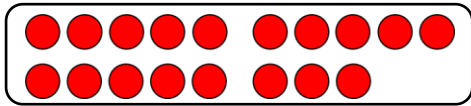
Name:

Klasse:

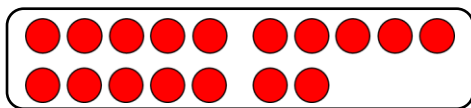
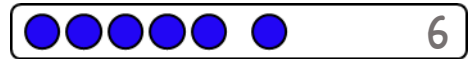
Datum:

Ergänzen zum Zehner

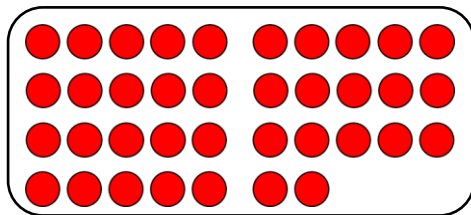

1. Welcher Streifen passt, damit die Reihe voll wird? Verbinde.
Trage immer die fehlende Zahl blau in die Lücke ein.





$$18 + 2 = 20$$



$$17 + 3 = 20$$

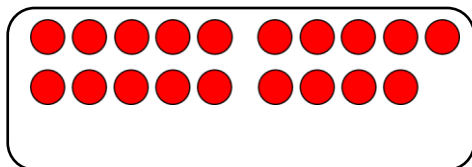


$$47 + 3 = 50$$

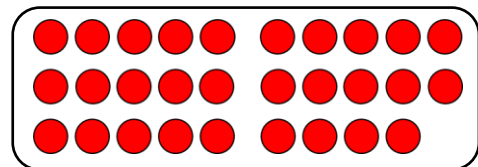


2. Welcher Streifen passt, damit der Zehner voll wird? Trage die fehlenden Zahlen mit einem blauen Stift in die Lücken ein.

a)

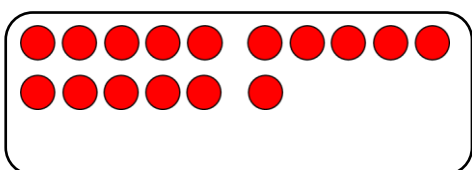


$$19 + 1 = 20$$

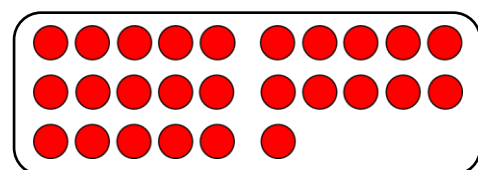


$$29 + 1 = 30$$

b)



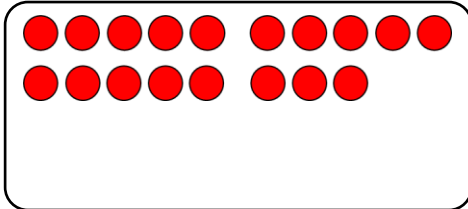
$$16 + 4 = 20$$



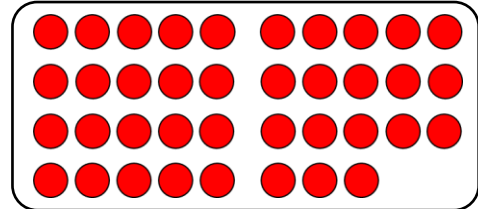
$$26 + 4 = 30$$



c)




$$18 + 2 = 20$$

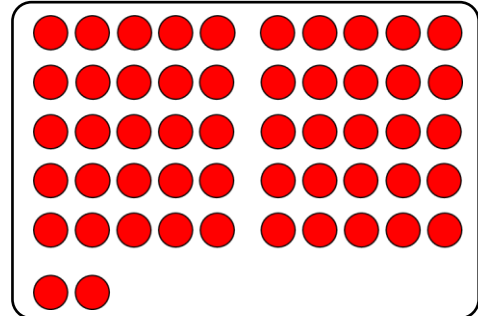


$$38 + 2 = 40$$

d)

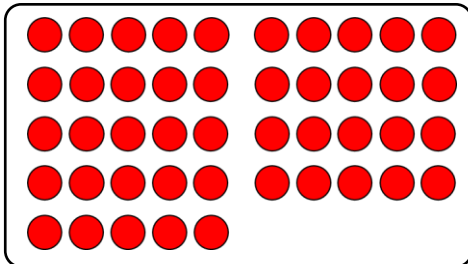


$$32 + 8 = 40$$

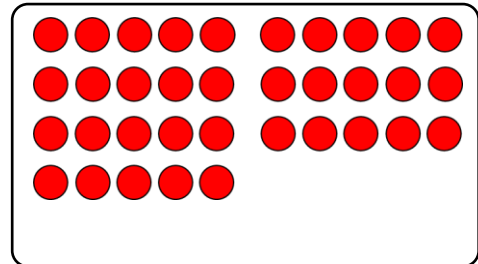


$$52 + 8 = 60$$

e)

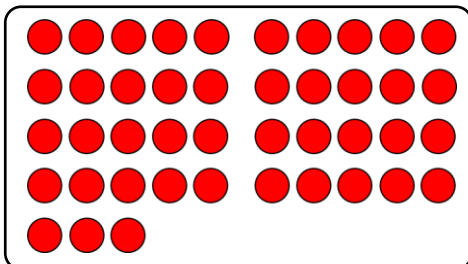


$$45 + 5 = 50$$

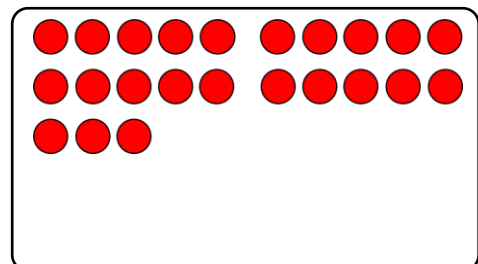


$$35 + 5 = 40$$

f)



$$43 + 7 = 50$$



$$23 + 7 = 30$$

3. Löse die Aufgaben im Kopf. Stelle dir dabei die Streifen vor.

a) $36 + 4 = 40$

b) $23 + 7 = 30$

c) $58 + 2 = 60$

$46 + 4 = 50$

$43 + 7 = 50$

$78 + 2 = 80$

d) $24 + 6 = 30$

e) $77 + 3 = 80$

f) $32 + 8 = 40$

$64 + 6 = 70$

$87 + 3 = 90$

$62 + 8 = 70$